

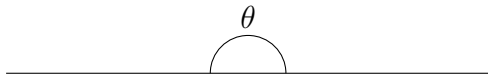
Name: \_\_\_\_\_

Date: \_\_\_\_\_

Types of angles: Answers

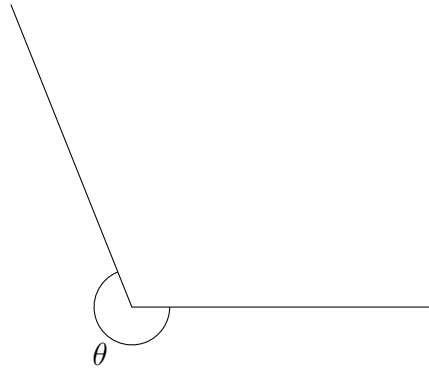
---

(1)



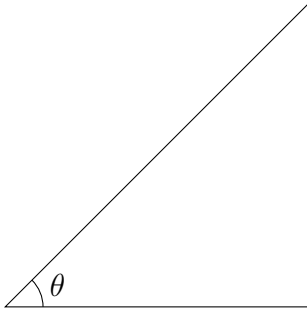
Straight angle

(5)



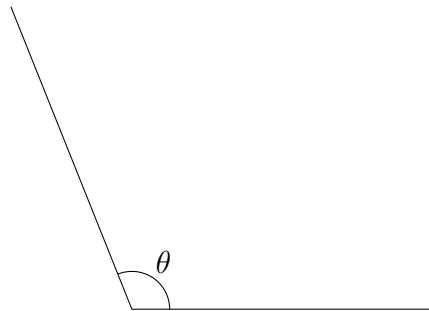
Reflex angle

(2)



Acute angle

(6)



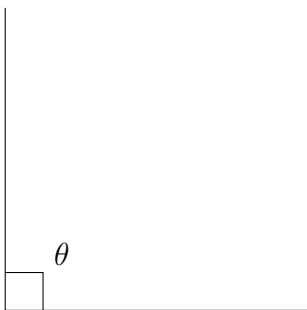
Obtuse angle

(3)



Revolution

(4)



Right angle