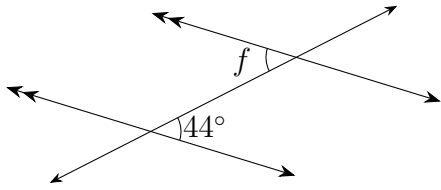


Name: _____

Date: _____

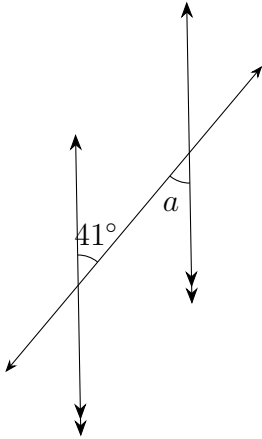
Parallel lines Angles: Questions

(1)



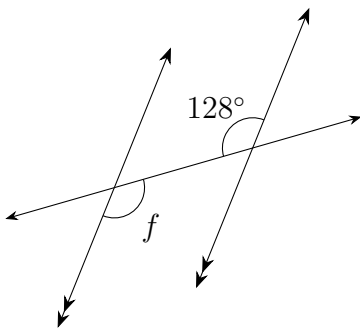
$\angle f = \dots\dots^\circ$

(2)



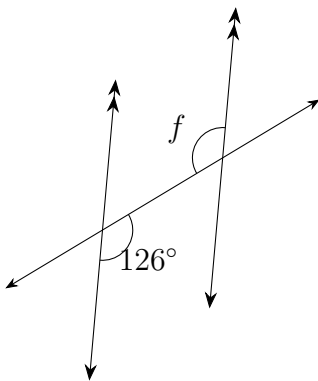
$\angle a = \dots\dots^\circ$

(3)



$\angle f = \dots\dots^\circ$

(4)



$\angle f = \dots\dots^\circ$