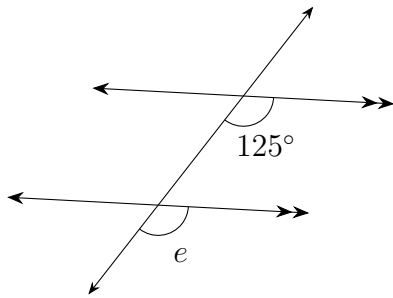


Name: _____

Date: _____

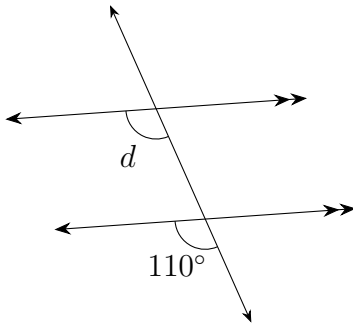
Parallel lines : Answers

(1)



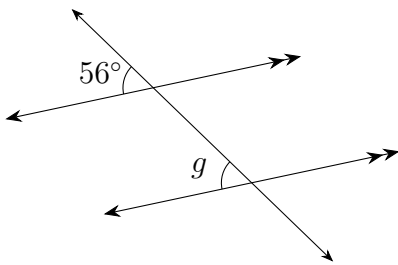
$$\angle e = 125^\circ$$

(2)



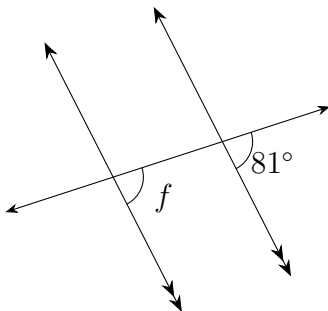
$$\angle d = 110^\circ$$

(3)



$$\angle g = 56^\circ$$

(4)



$$\angle f = 81^\circ$$