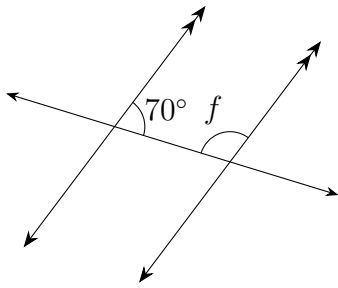


Name: _____

Date: _____

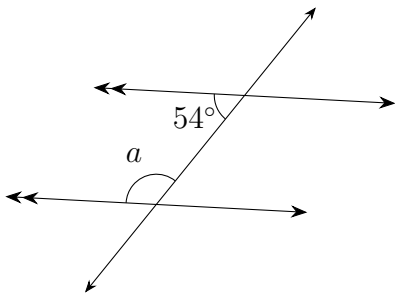
Parallel lines Angles: Questions

(1)



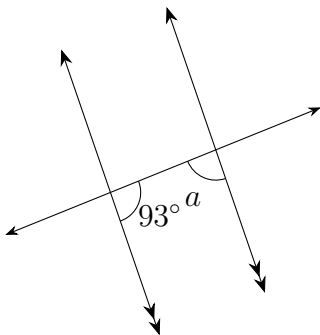
$$\angle f = \dots\dots^\circ$$

(2)



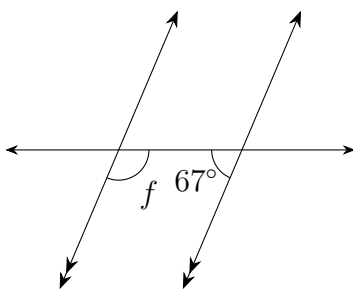
$$\angle a = \dots\dots^\circ$$

(3)



$$\angle a = \dots\dots^\circ$$

(4)



$$\angle f = \dots\dots^\circ$$