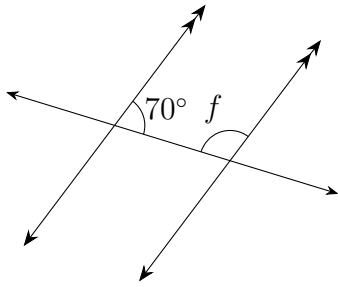


Name: _____

Date: _____

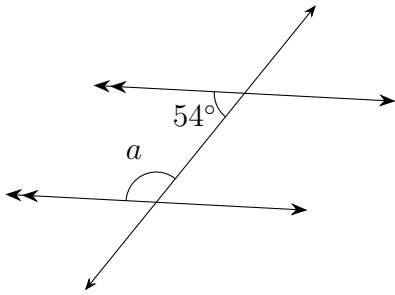
Parallel lines : Answers

(1)



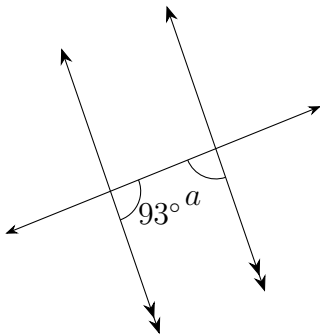
$$\angle f = 110^\circ$$

(2)



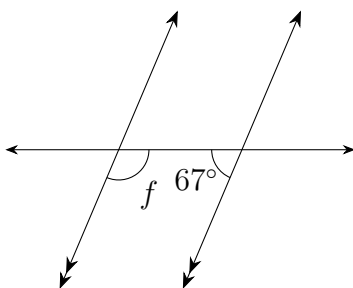
$$\angle a = 126^\circ$$

(3)



$$\angle a = 87^\circ$$

(4)



$$\angle f = 113^\circ$$