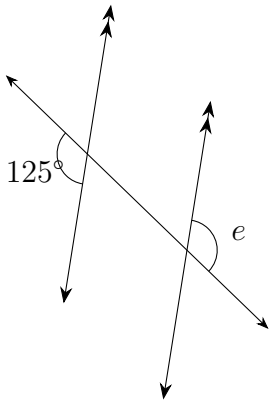


Name: _____

Date: _____

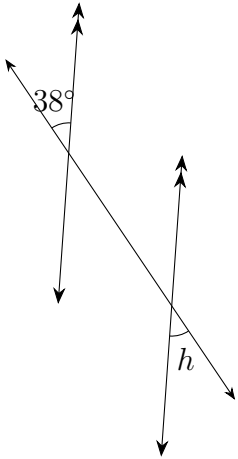
Parallel lines : Answers

(1)



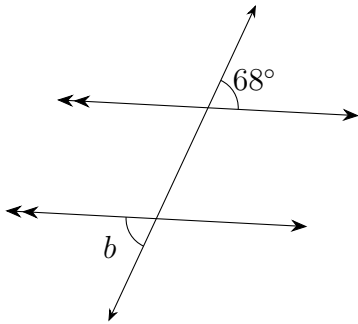
$$\angle e = 125^\circ$$

(2)



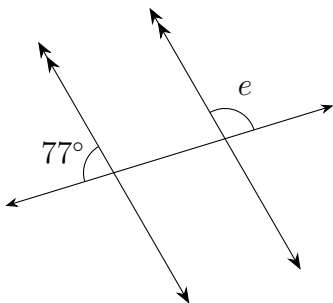
$$\angle h = 38^\circ$$

(3)



$$\angle b = 68^\circ$$

(4)



$$\angle e = 103^\circ$$