

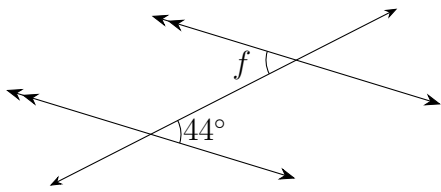
Name: \_\_\_\_\_

Date: \_\_\_\_\_

Parallel lines : Answers

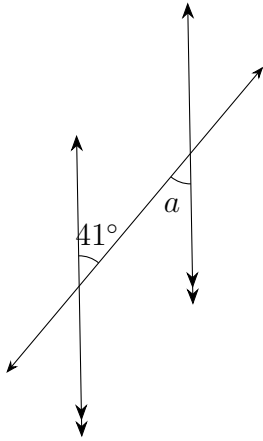
---

(1)



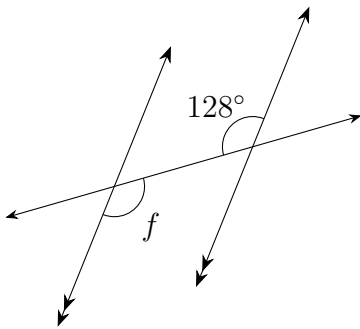
$$\angle f = 44^\circ$$

(2)



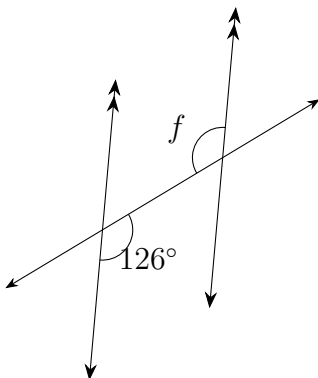
$$\angle a = 41^\circ$$

(3)



$$\angle f = 128^\circ$$

(4)



$$\angle f = 126^\circ$$